

What time is it?



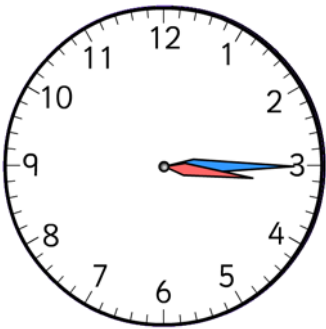
It's three o'clock




It's five **past** three



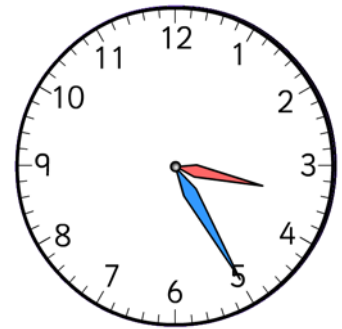
It's ten **past** three



It's **a quarter past** three



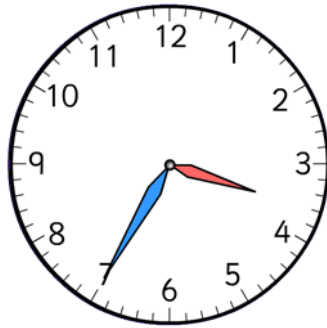
It's twenty **past** three



It's twenty-five **past** three



It's **half past** three



It's twenty-five **to** four



It's twenty **to** four



It's **a quarter to** four



It's ten **to** four



It's five **to** four